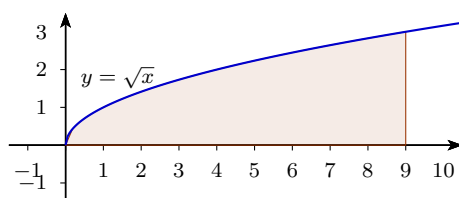


MATH2020A Homework 2

(15.2)

13. Sketch this region,



Then

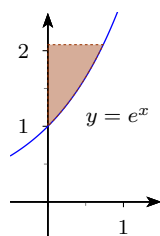
(a) Vertical cross-sections

$$\iint_R dA = \int_0^9 \int_0^{\sqrt{x}} dy dx$$

(b) Horizontal cross-sections

$$\iint_R dA = \int_0^3 \int_{y^2}^9 dx dy$$

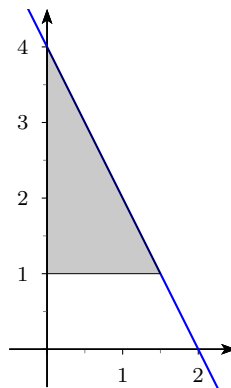
21. Sketch the region for $0 \leq x \leq \ln y$ and $1 \leq y \leq \ln 8$



Then

$$\begin{aligned}\int_1^{\ln 8} \int_0^{\ln y} e^{x+y} dx dy &= \int_1^{\ln 8} e^y (e^{\ln y} - 1) dy = \int_0^{\ln 8} e^y (y - 1) dy \\ &= (\ln 8 - 2)e^{\ln 8} - (1 - 2)e = 24 \ln 2 - 16 + e\end{aligned}$$

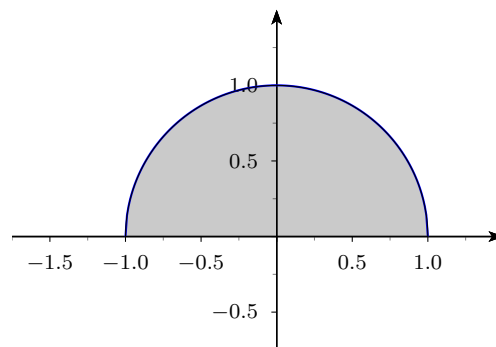
32. Sketch the region



Then

$$\begin{aligned}\int_0^{\frac{3}{2}} \int_1^{4-2u} \frac{4-2u}{v^2} dv du &= \int_0^{\frac{3}{2}} \left(-\frac{4-2u}{4-2u} + \frac{4-2u}{1} \right) du = \int_0^{\frac{3}{2}} (3-2u) du \\ &= 3 \times \frac{3}{2} - \frac{9}{4} = \frac{9}{4}\end{aligned}$$

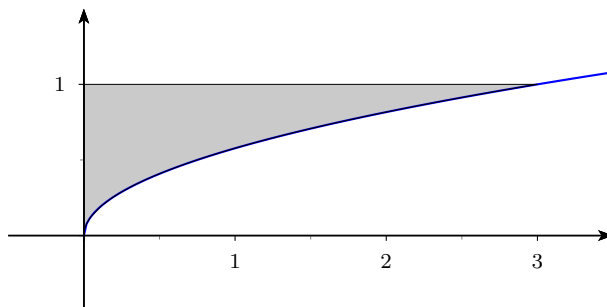
41. Sketch the region



Then change the order of integration

$$\int_0^1 \int_{-\sqrt{1-y^2}}^{\sqrt{1-y^2}} 3y dx dy = \int_{-1}^1 \int_0^{\sqrt{1-x^2}} 3y dy dx$$

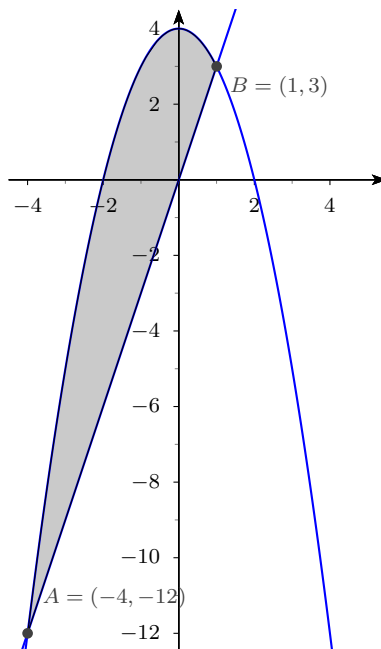
52. Sketch the region,



Then reverse the order of integration

$$\begin{aligned} \int_0^3 \int_{\sqrt{x/3}}^1 e^{y^3} dy dx &= \int_0^1 \int_0^{3y^2} e^{y^3} dx dy = \int_0^1 3y^2 e^{y^3} dy \\ &= \left[e^{y^3} \right]_0^1 = e - 1 \end{aligned}$$

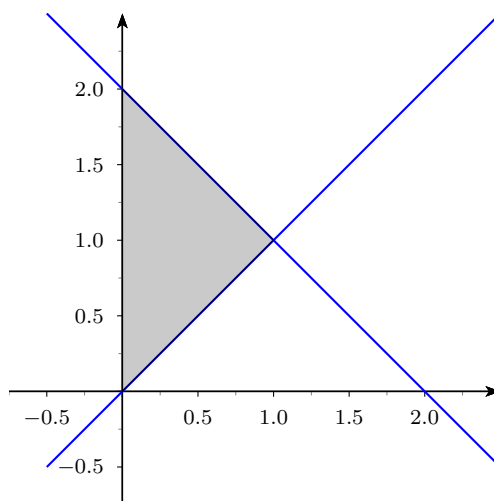
59. Sketch the region bounded by $y = 4 - x^2$ and $y = 3x$.



Hence,

$$\begin{aligned} V &= \int_{-4}^1 \int_{3x}^{4-x^2} (x+4) dy dx = \int_{-4}^1 (x+4)(4-x^2-3x) dx \\ &= \int_{-4}^1 (-x^3 - 7x^2 - 8x + 16) dx = \left[-\frac{x^4}{4} - \frac{7x^3}{3} - 4x^2 + 16x \right]_{-4}^1 = \frac{625}{12} \end{aligned}$$

77. Sketch the region R.

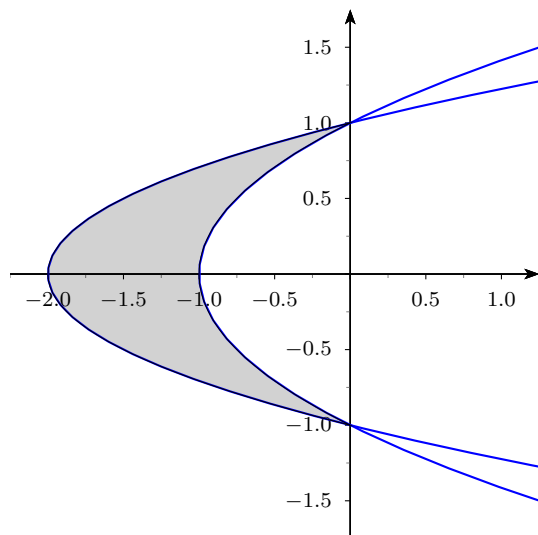


Reverse the order of integration,

$$\begin{aligned} V &= \int_0^1 \int_x^{2-x} (x^2 + y^2) dy dx = \int_0^1 (x^2(2-2x) + \frac{(2-x)^3 - x^3}{3}) dx \\ &= \int_0^1 \left(-\frac{8}{3}x^3 + 4x^2 - 4x + \frac{8}{3} \right) dx = \frac{4}{3} \end{aligned}$$

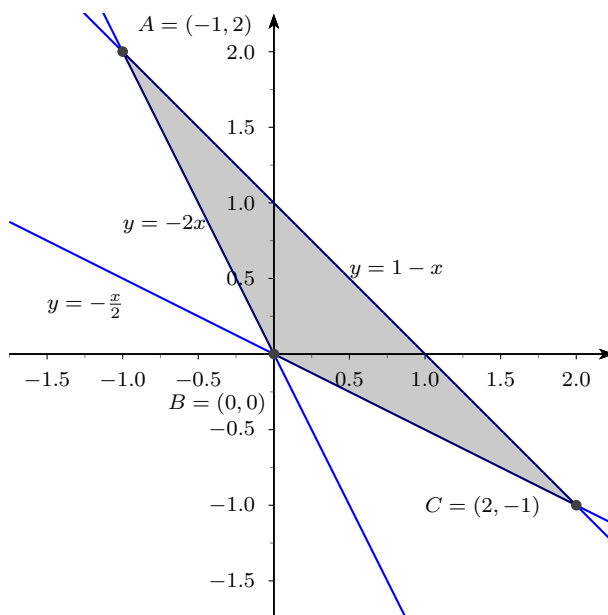
(15.3)

8. Sketch the region.



$$A = \int_{-1}^1 \int_{2y^2-2}^{y^2-1} dx dy = \int_{-1}^1 (1 - y^2) dy = \frac{4}{3}$$

17. Sketch the region and find intersections



$$\begin{aligned} A &= \int_{-1}^0 \int_{-2x}^{1-x} dydx + \int_0^2 \int_{-x/2}^{1-x} dydx = \int_{-1}^0 (1+x)dx + \int_0^2 (1-\frac{x}{2})dx \\ &= \frac{1}{2} + 1 = \frac{3}{2} \end{aligned}$$

21. Area of region is $A = 2^2 = 4$, So the average height is

$$\begin{aligned} \text{Average height} &= \frac{1}{4} \int_0^2 \int_0^2 (x^2 + y^2) dydx = \frac{1}{4} \int_0^2 (2x^2 + \frac{8}{3}) dx \\ &= \frac{1}{4} \times \frac{32}{3} = \frac{8}{3} \end{aligned}$$